

Code No: D4308, D5405

JAWAHARLAL NEHRU TECHNOLOGICAL UNIVERSITY HYDERABAD

M.Tech II - Semester Examinations, March/April 2011

RELIABILITY ENGINEERING

(COMMON TO POWER ELECTRONICS, POWER ELECTRONICS & ELECTRIC DRIVES)

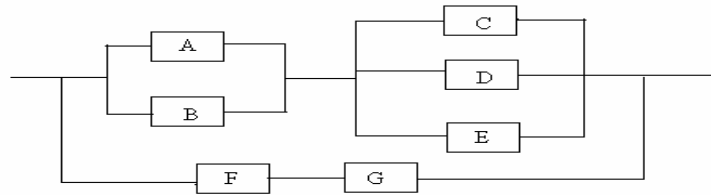
Time: 3hours

Max. Marks: 60

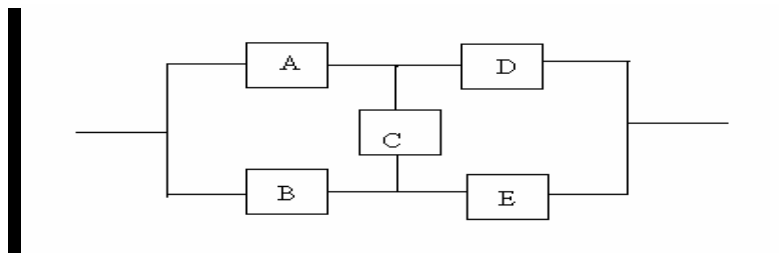
Answer any five questions
All questions carry equal marks

- - -

- Explain with examples random variables .
 - Derive expression for mean and standard derivation of exponential distribution. [12]
- Explain the concepts of Poisson distribution.
 - Derive expression for reliability function $R(t)$ of a reliability system in terms of failure rate. [12]
- Derive general expression for reliability of the following system, and obtain its reliability of each component is 0.95 [12]



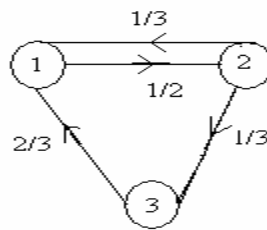
- Obtain the reliability of the following system using cut set technique if the reliability of each component is 0.75. Also derive the equation used. [12]



Cont...2

::2::

5. a) What do you mean by absorbing states. [12]
b) Explain the limiting state probabilities evaluation technique.
6. For the three state system shown below obtain [12]
a) Time dependent probability after three time intervals.
b) Limiting state probability.



7. Write short notes on the following. [12]
a) Normal distribution
b) Stochastic transitional probability
c) Bathtub curve.
8. Write short notes on the following: [12]
a) Normal distribution
b) Stochastic transitional probability matrix
c) Bathtub curve.
